

WORKSPACE

Name _____ Date _____

8.4

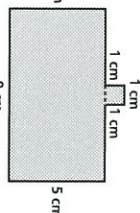
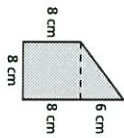

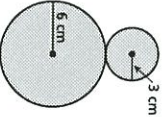
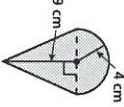
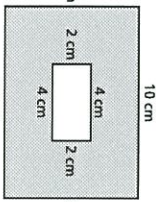
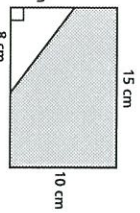
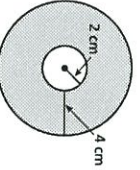
Puzzle Time

What Did One Flea Say To Another Flea?

A	B	C	D	E	F
G	H				

Complete each exercise. Find the answer in the answer column. Write the word under the answer in the box containing the exercise letter.

Find the area of the shaded region of the figure.

<p>A. </p>	<p>B. </p>
<p>C. </p>	<p>D. </p>
<p>E. </p>	<p>F. </p>
<p>G. </p>	<p>H. </p>

<p>61.12 cm² HOP</p>	<p>44.5 cm² WALK</p>
<p>126 cm² A</p>	<p>141.3 cm² OR</p>
<p>46 cm² DO</p>	<p>88 cm² WIE</p>
<p>100.48 cm² DOG</p>	<p>62 cm² ON</p>

A)

E)

B)

F)

C)

G)

D)

H)