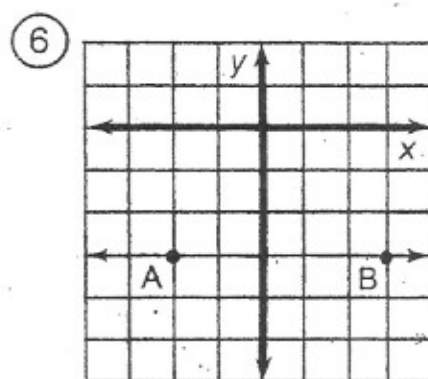
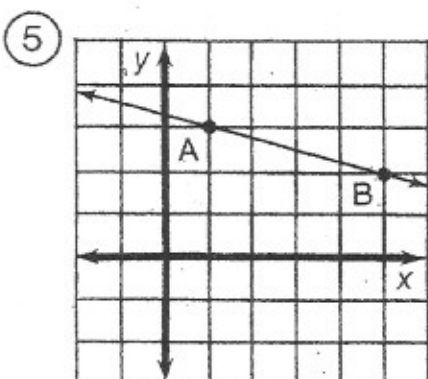
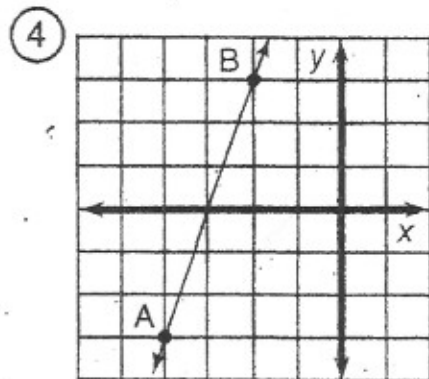
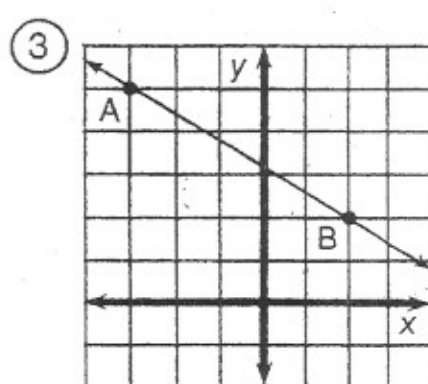
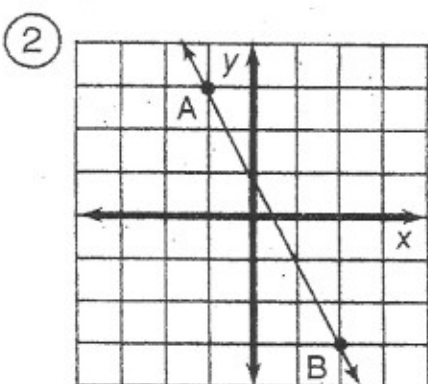
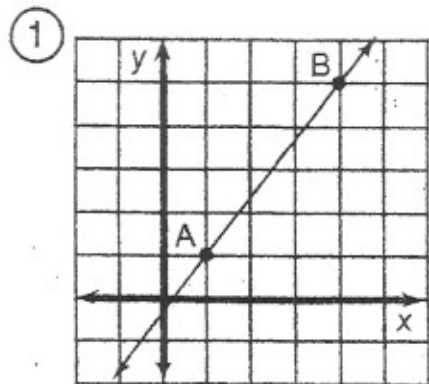


What Do You Call a Duck That Steals?

For the first six exercises, find the slope of the line \overleftrightarrow{AB} . For the remaining exercises, find the slope of the line that passes through the two given points. Cross out each box in the rectangle below that contains a correct answer. When you finish, print the letters from the remaining boxes in the spaces at the bottom of the page.



⑦ (2, 1); (5, 3)

⑪ (9, 2); (3, -1)

⑮ (-4, -8); (-2, 0)

⑧ (8, 3); (2, 5)

⑫ (-5, 8); (-4, 2)

⑯ (-3, -3); (0, 0)

⑨ (1, -4); (6, -2)

⑬ (0, -1); (4, -7)

⑰ (2, 5); (9, 1)

⑩ (-3, 1); (-7, 4)

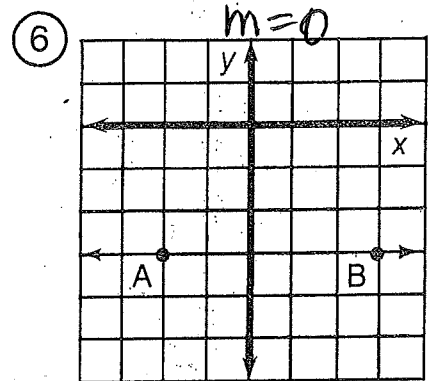
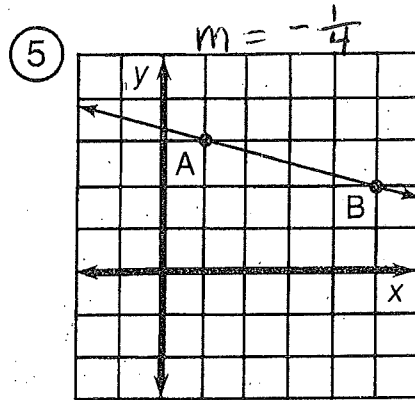
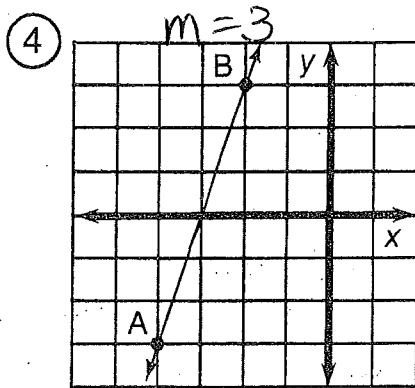
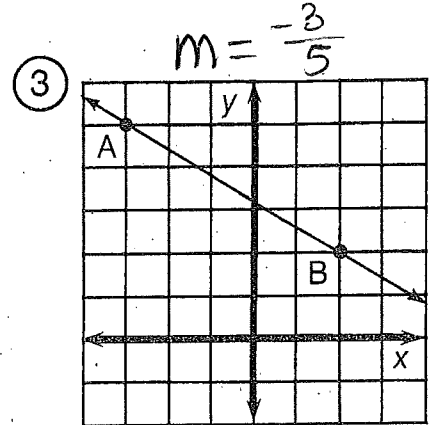
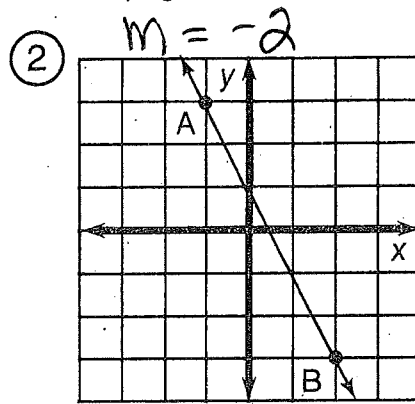
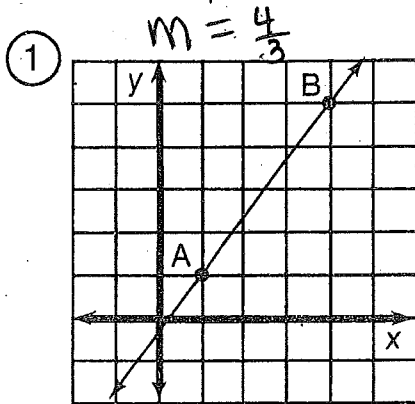
⑭ (1, -1); (-2, -6)

⑱ (0, 0); (-2, 7)

DU	AB	CK	ST	AR	IG	AT	OB	IG	ET	BE	ST
0	-6	$-\frac{3}{5}$	$-\frac{4}{7}$	9	$\frac{1}{2}$	$-\frac{7}{2}$	$-\frac{7}{6}$	$\frac{4}{3}$	$\frac{2}{3}$	$-\frac{5}{4}$	$\frac{5}{3}$
CA	RD	RI	CH	UC	RI	ME	AQ	UA	KY	ET	CK
$\frac{2}{5}$	$\frac{1}{6}$	$-\frac{1}{4}$	-2	-8	$-\frac{3}{2}$	1	$-\frac{1}{3}$	$-\frac{3}{4}$	$\frac{8}{5}$	4	3

What Do You Call a Duck That Steals?

For the first six exercises, find the slope of the line \overleftrightarrow{AB} . For the remaining exercises, find the slope of the line that passes through the two given points. Cross out each box in the rectangle below that contains a correct answer. When you finish, print the letters from the remaining boxes in the spaces at the bottom of the page.



⑦ (2, 1); (5, 3) $\frac{2}{3}$

⑪ (9, 2); (3, -1) $\frac{1}{2}$

⑮ (-4, -8); (-2, 0) 4

⑧ (8, 3); (2, 5) $-\frac{1}{3}$

⑫ (-5, 8); (-4, 2) -6

⑯ (-3, -3); (0, 0) 1

⑨ (1, -4); (6, -2) $\frac{2}{5}$

⑬ (0, -1); (4, -7) $-\frac{3}{2}$

⑰ (2, 5); (9, 1) $-\frac{4}{7}$

⑩ (-3, 1); (-7, 4) $-\frac{3}{4}$

⑭ (1, -1); (-2, -6) $\frac{5}{3}$

⑱ (0, 0); (-2, 7) $-\frac{7}{2}$

DU	AB	CK	ST	AR	IG	AT	OB	IG	ET	BE	ST
0	-6	$-\frac{3}{5}$	$-\frac{4}{7}$	9	$\frac{1}{2}$	$-\frac{7}{2}$	$-\frac{7}{6}$	$\frac{4}{3}$	$\frac{2}{3}$	$-\frac{5}{4}$	$\frac{5}{3}$
CA	RD	RI	CH	UC	RI	ME	AQ	UA	KY	ET	CK
$\frac{2}{5}$	$\frac{1}{6}$	$-\frac{1}{4}$	-2	-8	$-\frac{3}{2}$	1	$-\frac{1}{3}$	$-\frac{3}{4}$	$\frac{8}{5}$	4	3

A R O B B E R D U C K Y